

Name : _____

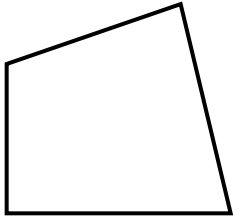
Score : _____

Teacher : _____

Date : _____

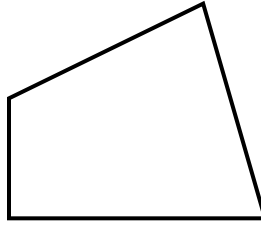
Identify the Type For Each Quadrilateral.

1)



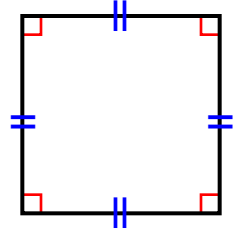
Type: Quadrilateral

2)



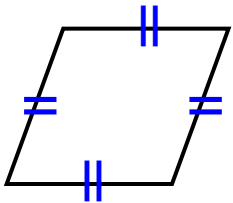
Type: Quadrilateral

3)



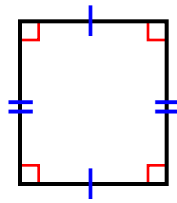
Type: Square

4)



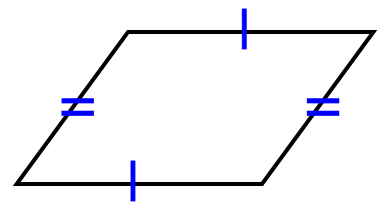
Type: Rhombus

5)



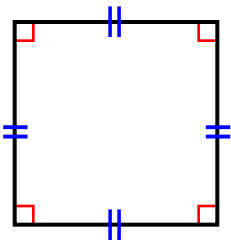
Type: Rectangle

6)



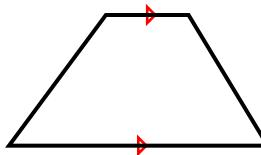
Type: Parallelogram

7)



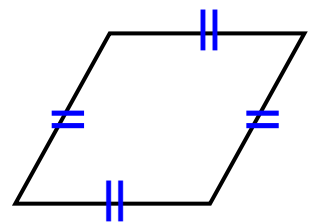
Type: Square

8)



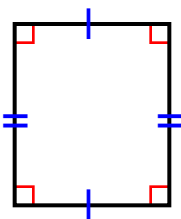
Type: Trapezoid

9)



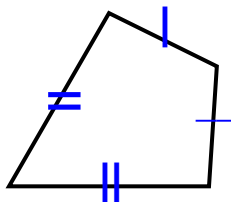
Type: Rhombus

10)



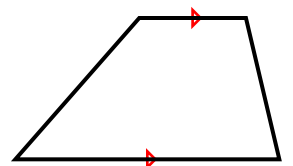
Type: Rectangle

11)



Type: Kite

12)



Type: Trapezoid

