

## Median & Quartiles

*Remember:*

**Median:** Middle number (when data is in order)

**Lower Quartile:** Halfway between lowest number and median

**Upper Quartile:** Halfway between median and highest number

1. Percentage achieved in a Statistics test:

78 82 74 45 68 75 93 54 61 70 48 66 62 51 77

Median:

Lower Quartile:

Upper Quartile:

2. Minutes per day spent playing computer games:

40 26 60 64 33 39 28 46 47 51 55

Median:

Lower Quartile:

Upper Quartile:

3. Time taken (in minutes) to solve a crossword puzzle:

12 24 21 16 8 9 3 31 18 27 35 41 26 12 17 6 5 19 29

Median:

Lower Quartile:

Upper Quartile:

4. Weight in kg of year 10 boys:

47 51 63 39 42 57 36 37 49 32 60 54 56 45 52

Median:

Lower Quartile:

Upper Quartile:

5. Height in cm of a group of year 10 girls:

153 147 160 146 162 158 159 149 152 150 163

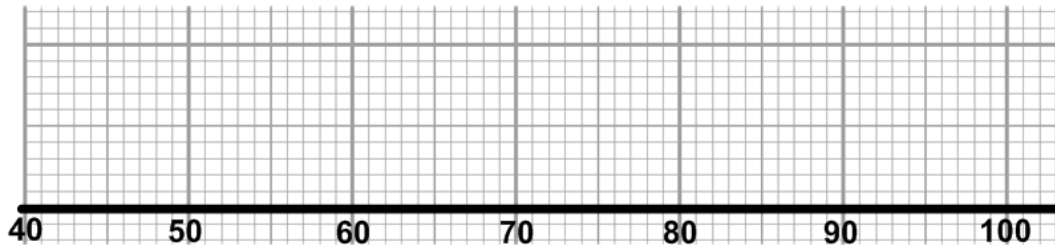
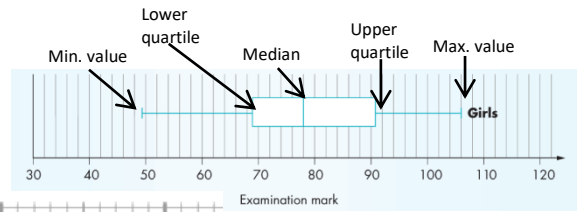
Median:

Lower Quartile:

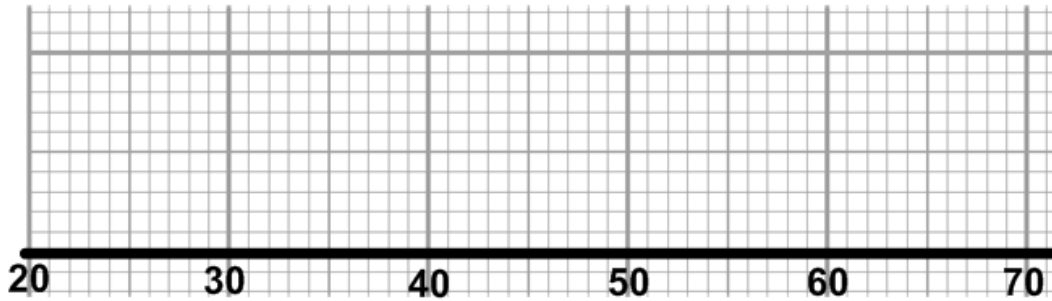
Upper Quartile:

## Box Plots

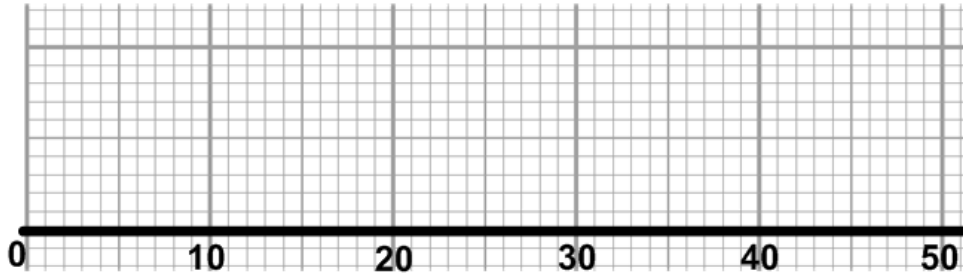
1. Draw a box plot for the percentage achieved in the statistics test.



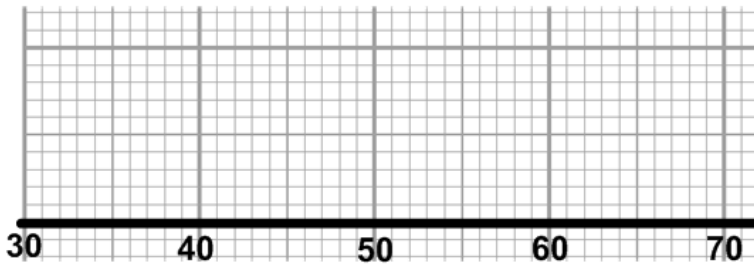
2. Draw a box plot for the minutes per day spent playing computer games.



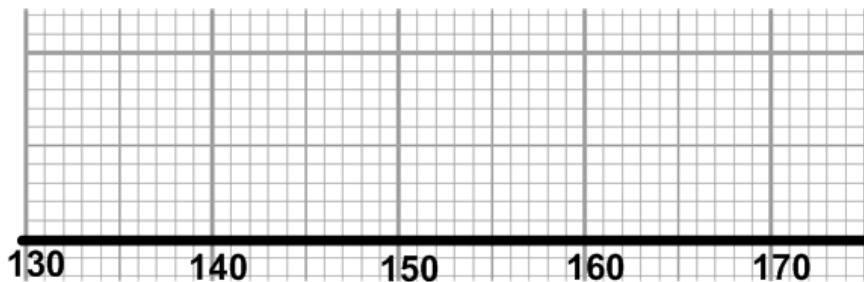
3. Draw a box plot for the time taken (in minutes) to solve a crossword puzzle.



4. Draw a box plot for the weight in kg of year 10 boys.



5. Draw a box plot for the height in cm of a group of year 10 girls.



## Median & Quartiles **ANSWERS**

*Remember:*

**Median:** Middle number (when data is in order)

**Lower Quartile:** Halfway between lowest number and median

**Upper Quartile:** Halfway between median and highest number

1. Percentage achieved in a Statistics test:

78 82 74 45 68 75 93 54 61 70 48 66 62 51 77

45 48 51 54 61 62 66 68 70 74 75 77 78 82 93

Median: **68**

Lower Quartile: **54**

Upper Quartile: **77**

2. Minutes per day spent playing computer games:

40 26 60 64 33 39 28 46 47 51 55

26 28 33 39 40 46 47 51 55 60 64

Median: **46**

Lower Quartile: **33**

Upper Quartile: **55**

3. Time taken (in minutes) to solve a crossword puzzle:

12 24 21 16 8 9 3 31 18 27 35 41 26 12 17 6 5 19 29

3 5 6 8 9 12 12 16 17 18 19 21 24 26 27 29 31 35 41

Median: **18**

Lower Quartile: **9**

Upper Quartile: **27**

4. Weight in kg of year 10 boys:

47 51 63 39 42 57 36 37 49 32 60 54 56 45 52

32 36 37 39 42 45 47 49 51 52 54 56 57 60 63

Median: **49**

Lower Quartile: **39**

Upper Quartile: **56**

5. Height in cm of a group of year 10 girls:

153 147 160 146 162 158 159 149 152 150 163

146 147 149 150 152 153 158 159 160 162 163

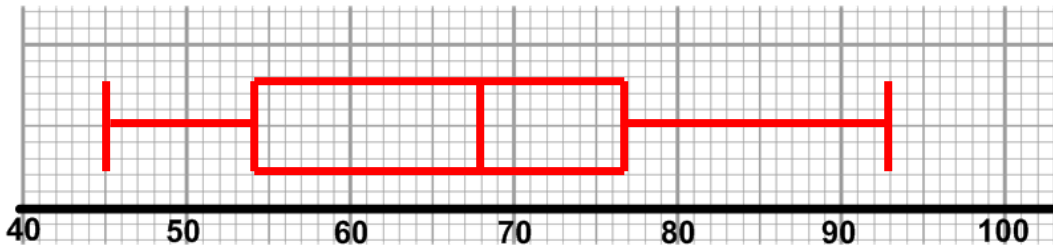
Median: **153**

Lower Quartile: **149**

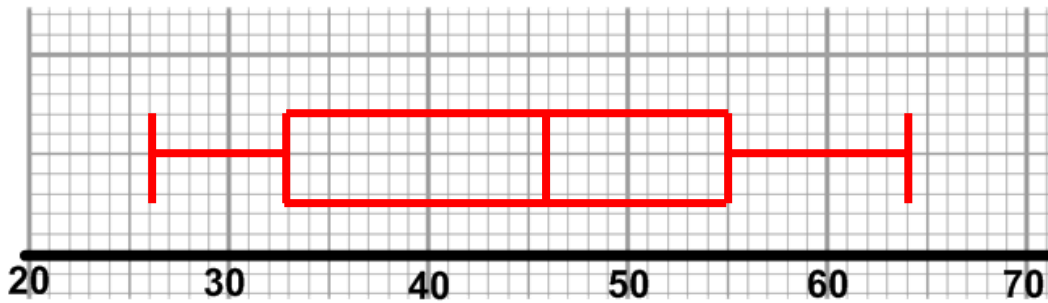
Upper Quartile: **160**

### Box Plots ANSWERS

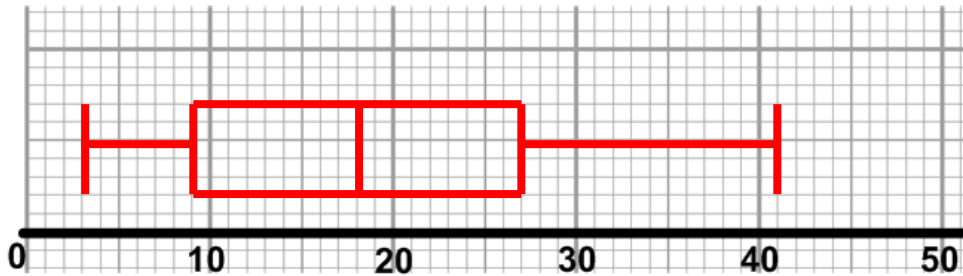
1. Draw a box plot for the percentage achieved in the statistics test.



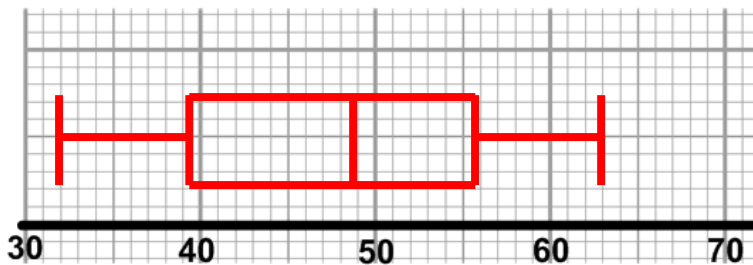
2. Draw a box plot for the minutes per day spent playing computer games.



3. Draw a box plot for the time taken (in minutes) to solve a crossword puzzle.



4. Draw a box plot for the weight in kg of year 10 boys.



5. Draw a box plot for the height in cm of a group of year 10 girls.

