

Name : _____

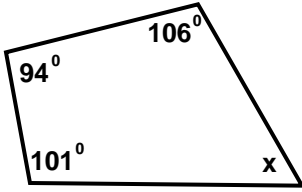
Score : _____

Teacher : _____

Date : _____

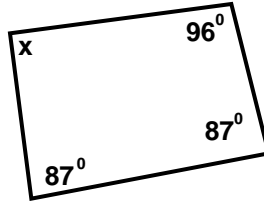
Find the measure of the missing angle.

1)



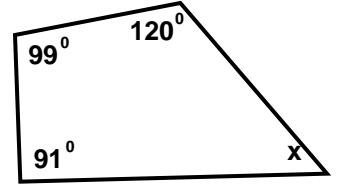
Solve for x 59°

2)



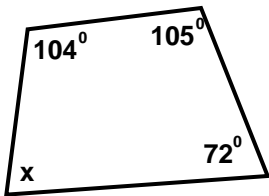
Solve for x 90°

3)



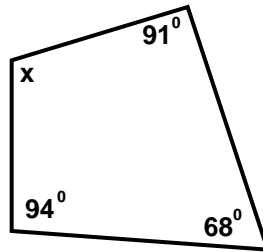
Solve for x 50°

4)



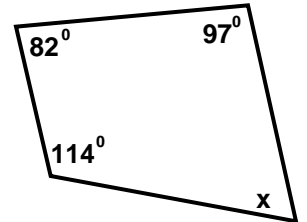
Solve for x 79°

5)



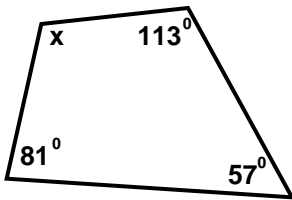
Solve for x 107°

6)



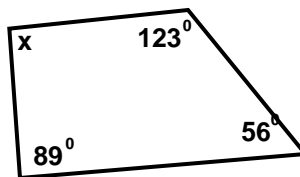
Solve for x 67°

7)



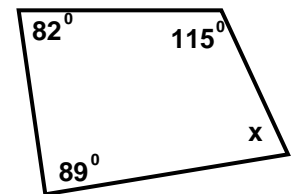
Solve for x 109°

8)



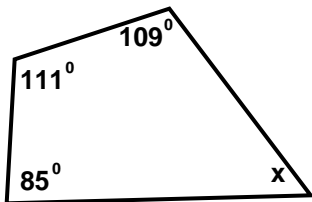
Solve for x 92°

9)



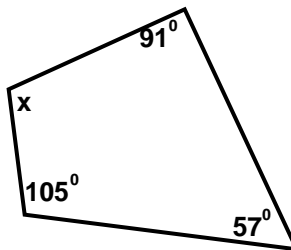
Solve for x 74°

10)



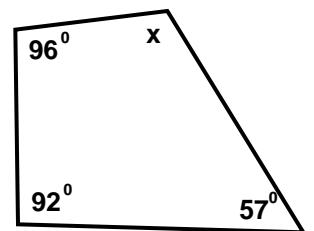
Solve for x 55°

11)



Solve for x 107°

12)



Solve for x 115°

