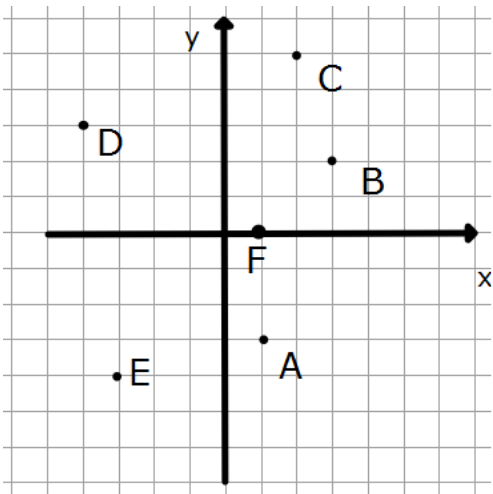
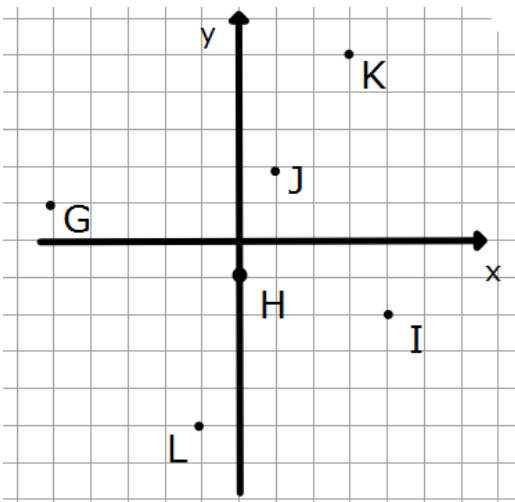


Reflecting Points in the Axes



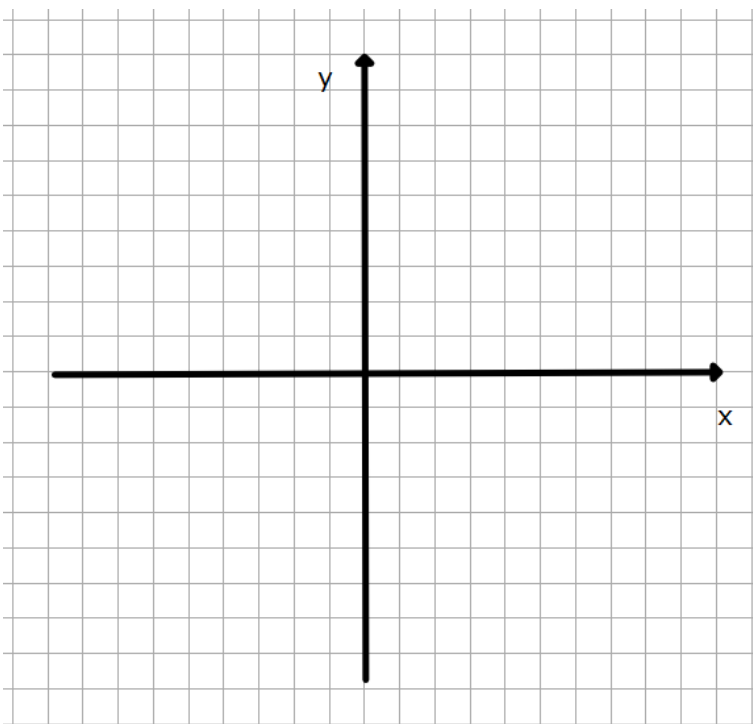
- 1) The points shown on the grid to the left have been reflected in the x axis to find the following points. Are they correct, if they are incorrect list the correct co-ordinate?

Reflected Point	Co-ordinates
A'	(1,3)
B'	(3,-1)
C'	(2,-5)
D'	(-4,-3)
E'	(3,-4)
F'	(1,0)



- 2) The points shown on the grid to the left have been reflected in the y axis to find the following points. Are they correct, if they are incorrect list the correct co-ordinate?

Reflected Point	Co-ordinates
G'	(5,1)
H'	(0,1)
I'	(-3,-2)
J'	(-1,2)
K'	(-3,5)
L'	(1,5)



- 3) Plot your own 10 points, reflect them in the y axis and x axis.

Point	Coordinates	Reflect in x axis	Reflect in y axis
A			
B			
C			
D			
E			
F			
G			
H			
I			
J			