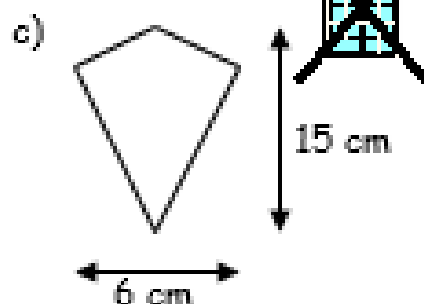
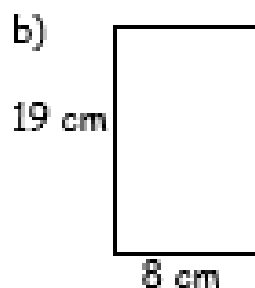
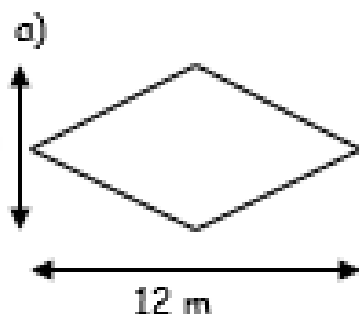
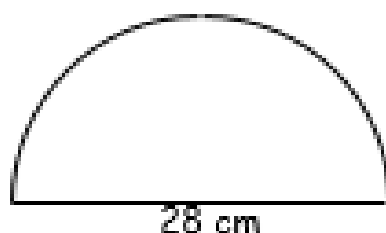


S2 (M) Maths Homework 10

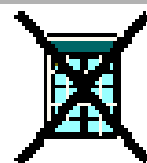
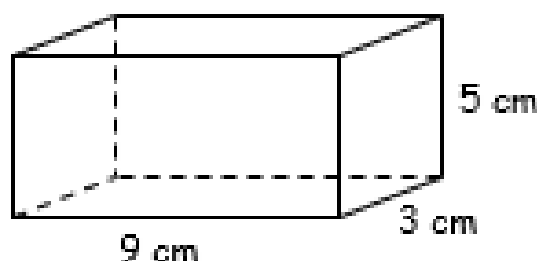
- 1) Find the area of each of these shapes.



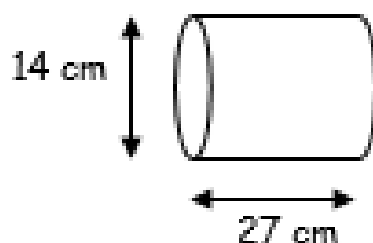
- 2) Find, a) the area of this shape
b) the perimeter of this shape



- 3) Find the surface area of this cuboid.



- 4) a) Find the curved surface area of this cylinder.
b) Find the total surface area of this cylinder.



- 5) Find,

a) $\frac{2}{5}$ of £75

b) $\frac{4}{7}$ of 476 kg

c) 75% of £326

d) 90% of 524 m

